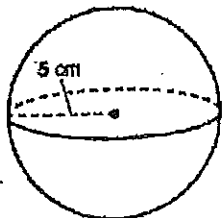


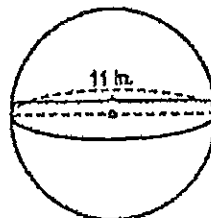
Surface Area - SPHERES

Evaluate the surface area of each sphere. Show all of your work.

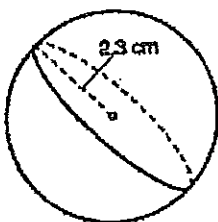
1.



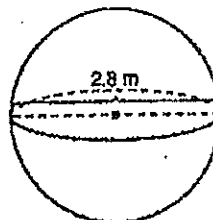
2.



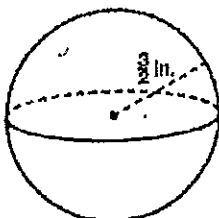
3.



4.



5.



6.

