

Versatile –

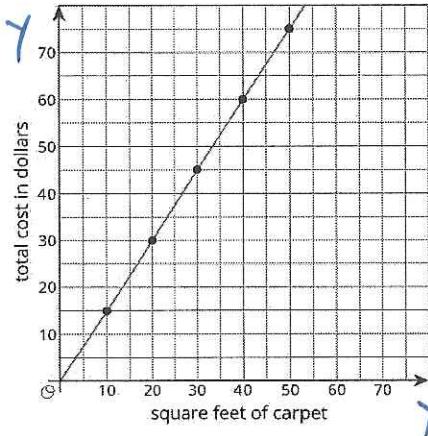
NAME key

Writing Equations from Graphs and Tables

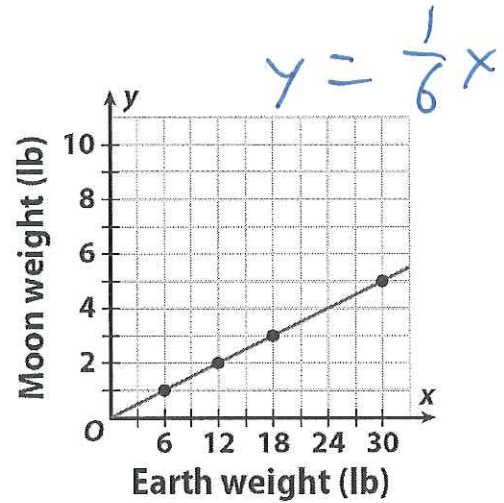
Problems

$$y = 1.5x$$

1.



4.

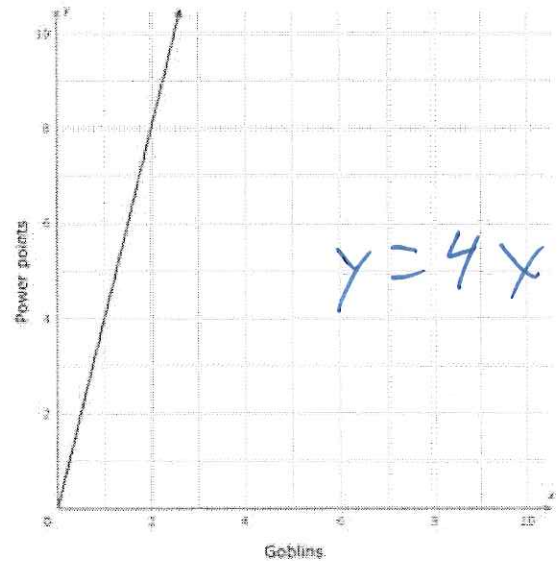


2.

X	Y
3	15
4	20
7	35
9	45

$$y = 5x$$

5.



3.

X	Y
5	4
10	8
15	12
20	16

$$y = \frac{4}{5}x$$

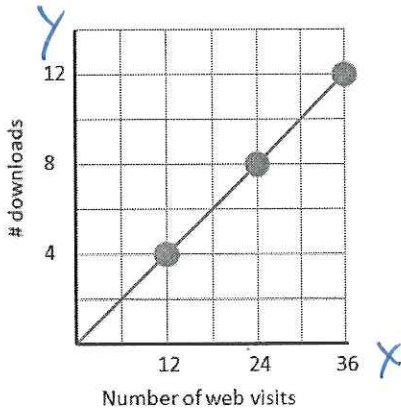
6.

X	Y
4	8
6	12
8	16
10	20

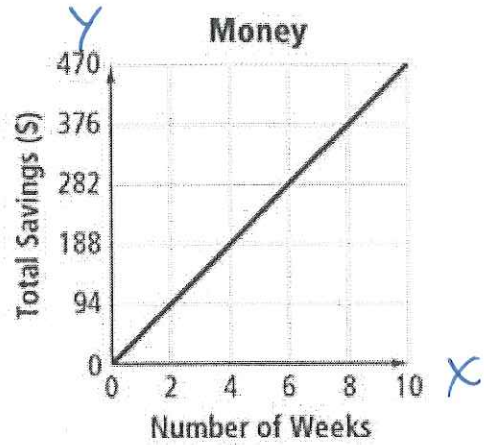
$$y = 2x$$

$$y = \frac{1}{3}x$$

7.



10.



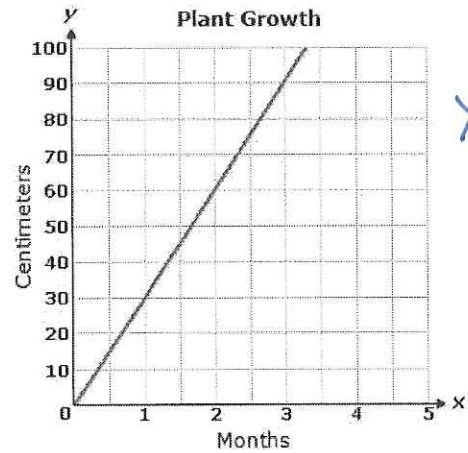
8.

X	Y
2	7
4	14
6	21
8	28

$$y = \frac{7}{2}x$$

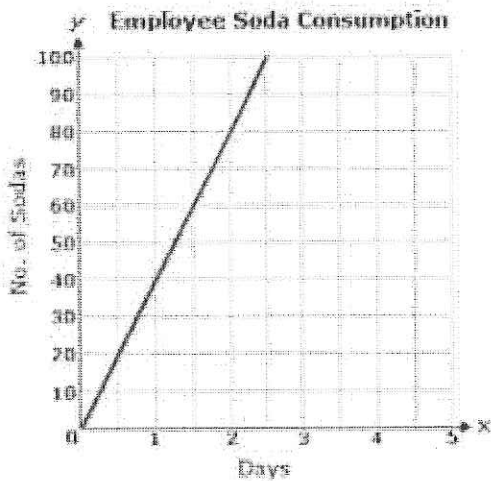
$$y = 3.5x$$

11.



$$y = 30x$$

9.



$$y = 40x$$

12.

X	Y
6	3
8	4
12	6
18	9

$$y = \frac{1}{2}x$$