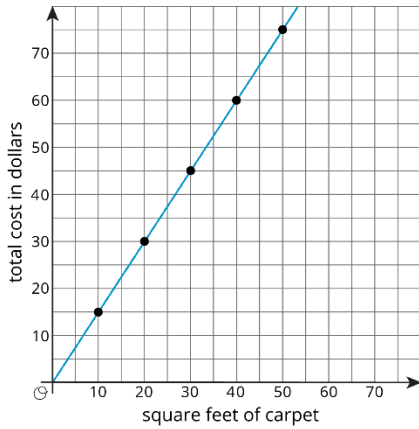


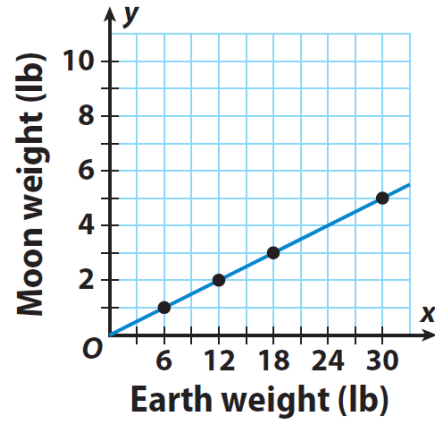
# Writing Equations from Graphs and Tables

## Problems

1.



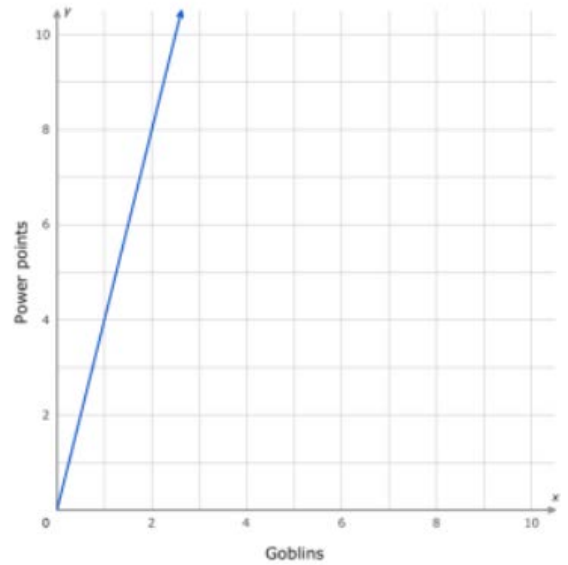
4.



2.

X	Y
3	15
4	20
7	35
9	45

5.



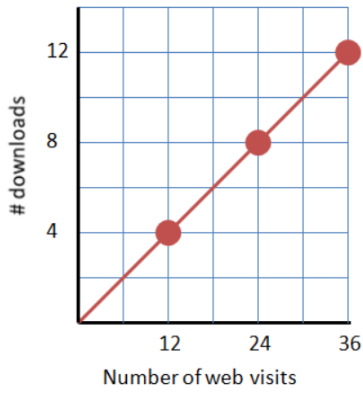
3.

X	Y
5	4
10	8
15	12
20	16

6.

X	Y
4	8
6	12
8	16
10	20

7.



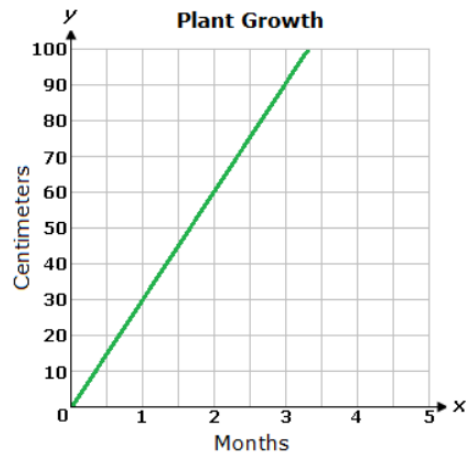
10.



8.

X	Y
2	7
4	14
6	21
8	28

11.



9.



12.

X	Y
6	3
8	4
12	6
18	9