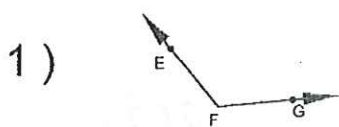


Naming \angle 's

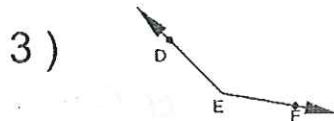
Name: Key

7th Grade Math

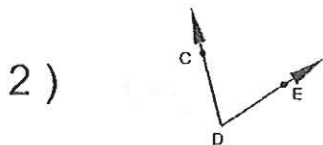
Name the vertex and sides of each angle



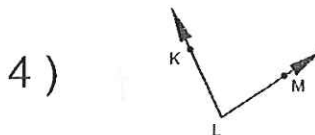
F
 $\angle EFG$



E
 $\angle DEF$



D
 $\angle CDE$



L
 $\angle KLM$

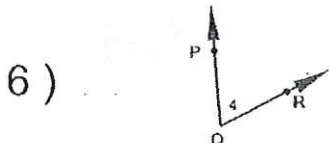
Name each angle 4 ways



$\angle 7$ $\angle NML$
 $\angle M$
 $\angle LMN$



$\angle 6$ $\angle OPQ$
 $\angle P$ $\angle QPO$

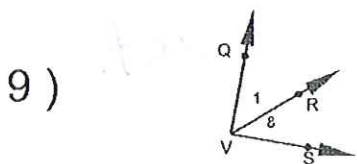


$\angle 4$ $\angle PQR$
 $\angle Q$ $\angle RQP$

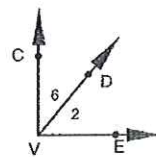


$\angle 1$ $\angle NOP$
 $\angle O$ $\angle PON$

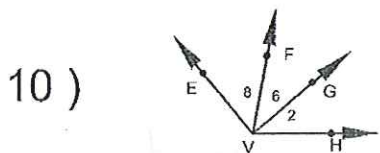
Name each angle that has V as a vertex



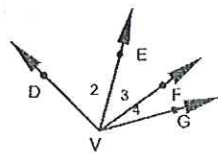
$\angle 1$ $\angle 8$ 11) $\angle QVS$



$\angle 2$ $\angle 6$
 $\angle CVE$



$\angle 2$, $\angle 6$, $\angle 8$ 12) $\angle EVG$
 $\angle FVH$
 $\angle EVH$



$\angle 2$, $\angle 3$, $\angle 4$
 $\angle DVF$
 $\angle EVG$
 $\angle DVG$